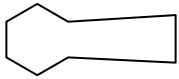




Determine which letter BEST represents the shapes that were used to create the figure shown.

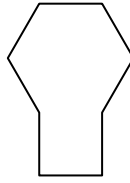
Answers

1)



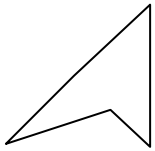
- A. pentagon & triangle
- B. quadrilateral & hexagon
- C. hexagon & octagon
- D. rectangle & hexagon

2)



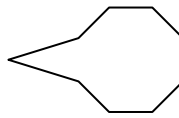
- A. octagon & heptagon
- B. rectangle & hexagon
- C. pentagon & hexagon
- D. quadrilateral & square

3)



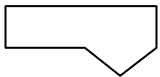
- A. octagon & square
- B. triangle & quadrilateral
- C. triangle & triangle
- D. rectangle & square

4)



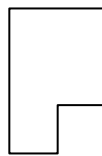
- A. square & heptagon
- B. triangle & heptagon
- C. pentagon & rectangle
- D. triangle & octagon

5)



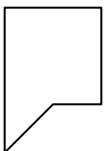
- A. quadrilateral & hexagon
- B. rectangle & triangle
- C. hexagon & square
- D. octagon & triangle

6)



- A. octagon & square
- B. quadrilateral & quadrilateral
- C. triangle & octagon
- D. rectangle & pentagon

7)



- A. rectangle & square
- B. quadrilateral & triangle
- C. quadrilateral & hexagon
- D. heptagon & quadrilateral

8)



- A. triangle & rectangle
- B. rectangle & quadrilateral
- C. quadrilateral & pentagon
- D. hexagon & rectangle

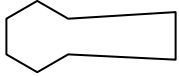
- 1. _____
- 2. _____
- 3. _____
- 4. _____
- 5. _____
- 6. _____
- 7. _____
- 8. _____



Determine which letter BEST represents the shapes that were used to create the figure shown.

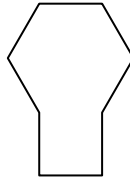
Answers

1)



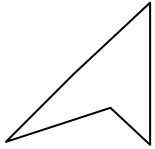
- A. pentagon & triangle
- B. quadrilateral & hexagon
- C. hexagon & octagon
- D. rectangle & hexagon

2)



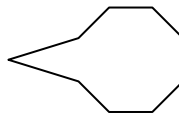
- A. octagon & heptagon
- B. rectangle & hexagon
- C. pentagon & hexagon
- D. quadrilateral & square

3)



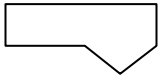
- A. octagon & square
- B. triangle & quadrilateral
- C. triangle & triangle
- D. rectangle & square

4)



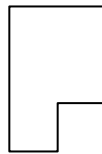
- A. square & heptagon
- B. triangle & heptagon
- C. pentagon & rectangle
- D. triangle & octagon

5)



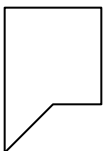
- A. quadrilateral & hexagon
- B. rectangle & triangle
- C. hexagon & square
- D. octagon & triangle

6)



- A. octagon & square
- B. quadrilateral & quadrilateral
- C. triangle & octagon
- D. rectangle & pentagon

7)



- A. rectangle & square
- B. quadrilateral & triangle
- C. quadrilateral & hexagon
- D. heptagon & quadrilateral

8)



- A. triangle & rectangle
- B. rectangle & quadrilateral
- C. quadrilateral & pentagon
- D. hexagon & rectangle

- 1. **B**
- 2. **B**
- 3. **C**
- 4. **D**
- 5. **B**
- 6. **B**
- 7. **B**
- 8. **A**